

Name _____

Activity: Make a Bar Graph

Work Together

Make a **tally chart**.

Ask **8** classmates their favorite color bike.

Make **1** tally for each answer.





Objective

Use a tally chart to make a bar graph and compare information.

Vocabulary

tally chart

1. Favorite Bike Color


	
	
	
	

Use the tally chart to make a bar graph.
Color **1** box for each tally.

Think

How many choose red?
I color that number of boxes.

2. Favorite Bike Color




3. Write About It

Make up a question about the bar graph.

On Your Own

I cross out 1 car.
Then I color 1 box.

Use the picture. Make a bar graph.



Use the bar graph to solve.

1. How many kinds of cars are there?
4 kinds

2. How many are there?

3. Circle the one that has 1 more than .

4. How many more than are there?
 more

5. Are there fewer or ? Circle.

6. How many and are there?

7. Circle which has the greatest number of cars.

8. Circle which has the least number of cars.