


Name _____ Date _____


Pre-Test/Post-Test: Quadrilaterals Answer Key

1. Another name for quadrilaterals is Polygons.
2. How many sides do all quadrilaterals have? 4.
3. Do all quadrilaterals have the same shape? No.
4. Which quadrilateral have no parallel sides? Trapeziums.

5. Draw a rhombus that does not have right angles. 

6. What quadrilaterals have two pairs of parallel sides? Parallelograms.

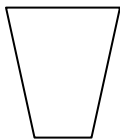
7. What quadrilaterals have one pair of parallel sides? Trapezoids.

8. Draw a rectangle with all sides the same length. 

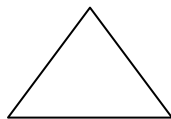
9. Describe the difference between trapezoids and trapeziums. Trapezoids have one pair of parallel sides and trapeziums have no parallel sides. Trapezoids have one pair of parallel side and trapeziums have no parallel sides.

10. Which of these figures is a quadrilateral? A

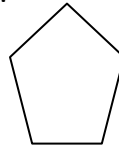
A.




B.



C.



D.



11. A square is **NOT** which of the following? C

A. Parallelogram

C. rhombus

B. Rectangle

D. trapezoids